
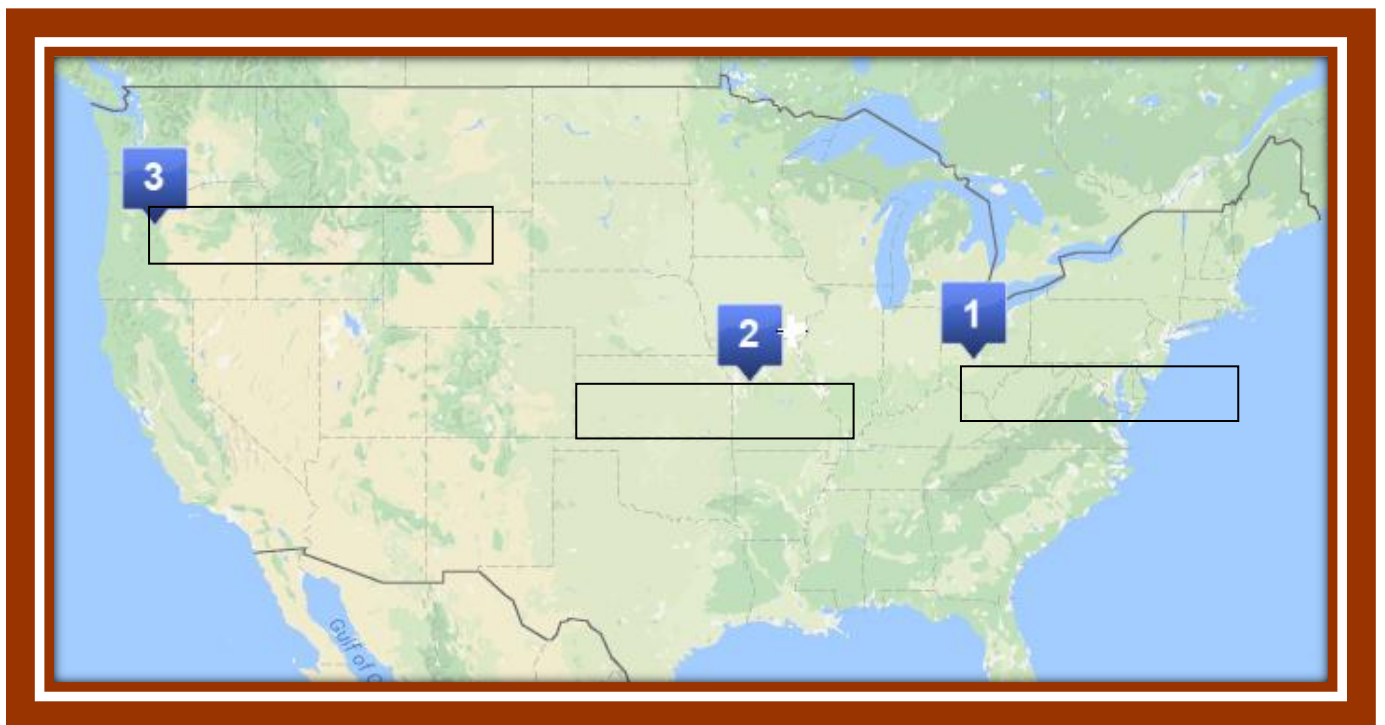


Map the Oregon Trail



The top map shows you the approximate route of the Oregon trail. Fill out the map at the bottom and draw the trail from Dayton to Independence to Willamette Valley.




1. Label the major stops of your journey along the Oregon trail in the provided boxes.
2. Take out your map of the United States. Can you label list the states you traveled through to get to Willamette Valley?

- a. _____
- b. _____
- c. _____
- d. _____
- e. _____
- f. _____
- g. _____
- h. _____
- i. _____

3. Write the letter for each state where it belongs on the map.
4. Does your U.S. map have a scale that shows miles? Use a ruler to find out how many miles you traveled from Ohio to Willamette Valley.

_____ miles

5. Your uncle went to California first as part of the Gold Rush. Can you draw a route he may have taken from Ohio to California to Oregon on your map?



Wagon Trail Sunset Silhouettes

